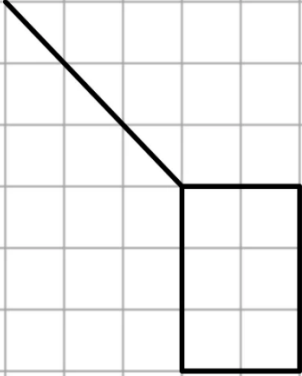

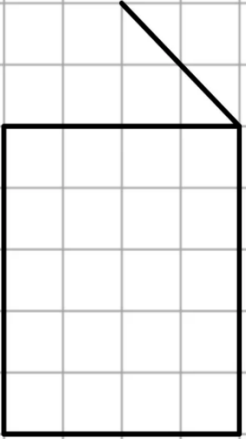
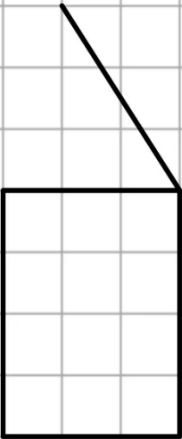

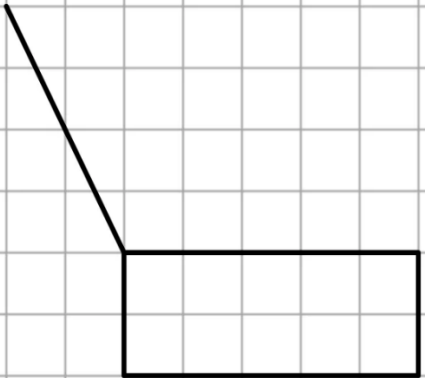
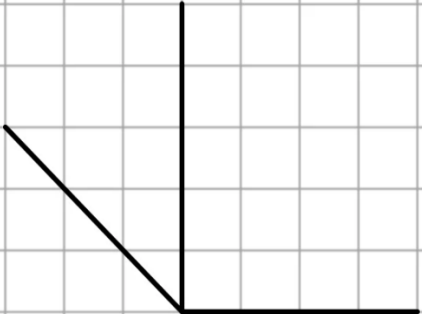
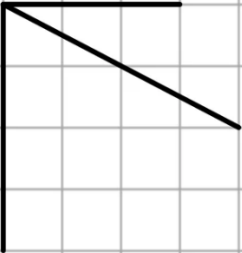



直方体と立方体6

(見取図)

年 組 名前()

下の図の続きをかいて、見取図を完成させましょう。

(1)	(2)	(3)
		
(4)	(5)	(6)
		
(7)	(8)	(9)
		

直方体と立方体6

(見取図)

年 組 名前()

下の図の続きをかいて、見取図を完成させましょう。

(1)	(2)	(3)
(4)	(5)	(6)
(7)	(8)	(9)