

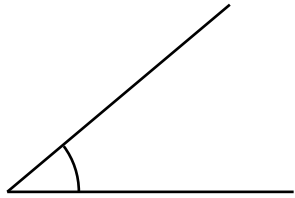
角の大きさの表し方6

(中級)

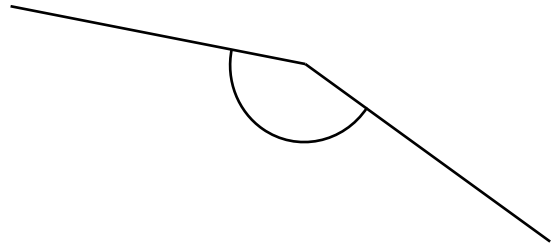
年 組 名前 ()

分度器を使って角度をはかりましょう。

(1)


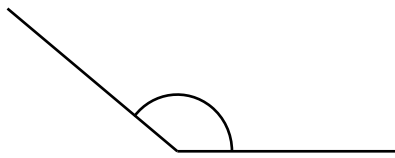


(2)



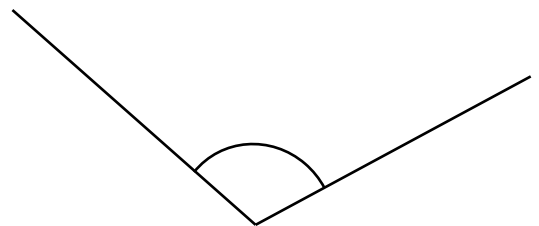
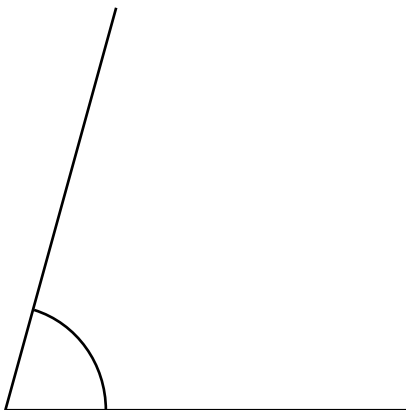
()
(3)

()
(4)



()
(5)

()
(6)



()

()

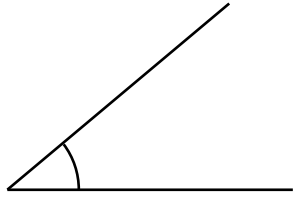
角の大きさの表し方6

(中級)

年 組 名前 ()

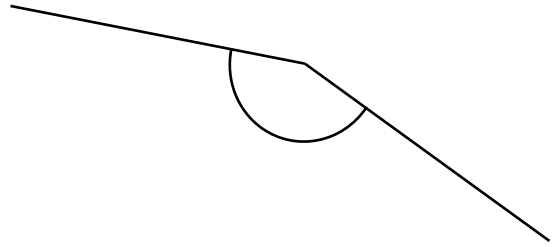
分度器を使って角度をはかりましょう。

(1)

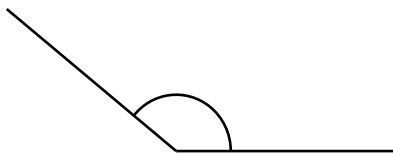


(40°)
(3)


(2)



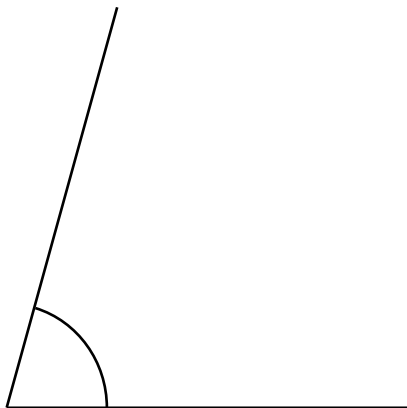
(155°)
(4)



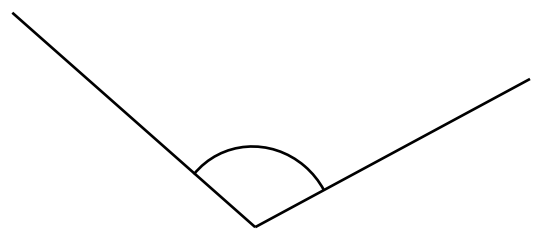
(140°)
(5)



(30°)
(6)



(75°)



(110°)