

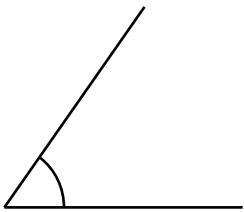
角の大きさの表し方5

(中級)

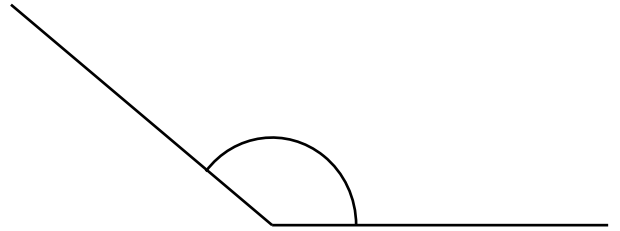
年 組 名前 ()

分度器を使って角度をはかりましょう。

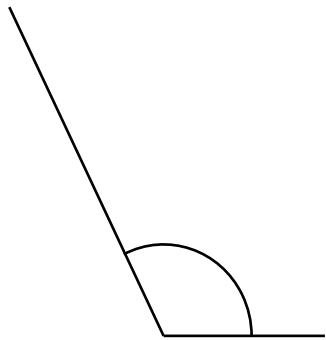
(1)



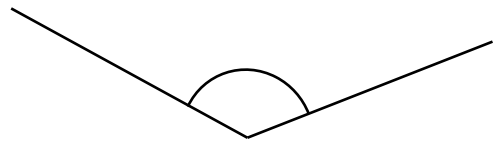
(2)



(3) ()



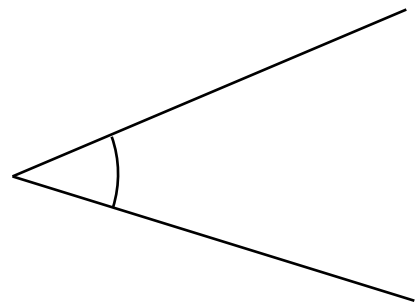
(4) ()



(5) ()



(6) ()



() ()

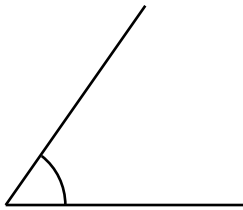
角の大きさの表し方5

(中級)

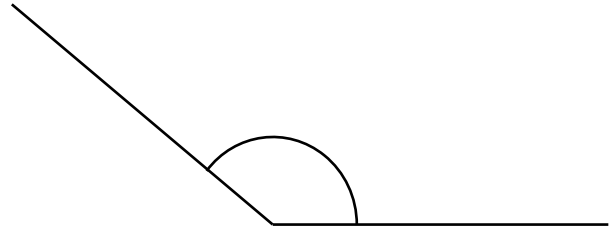
年 組 名前 ()

分度器を使って角度をはかりましょう。

(1)

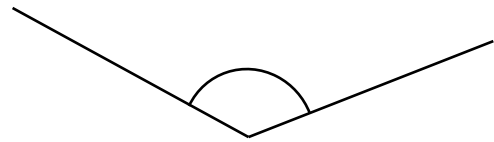
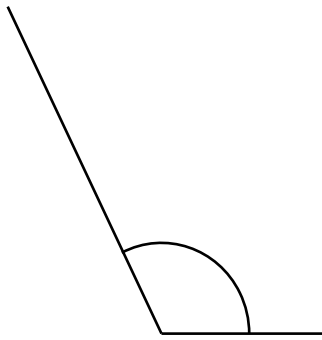


(2)



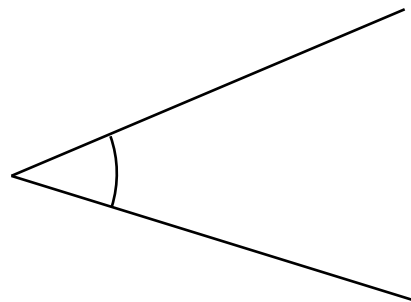
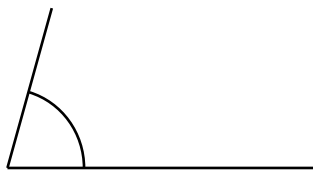
(**55°**)
(3)

(**140°**)
(4)



(**115°**)
(5)

(**130°**)
(6)



(**75°**)

(**40°**)