

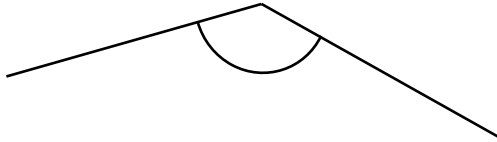
# 角の大きさの表し方8

(中級)

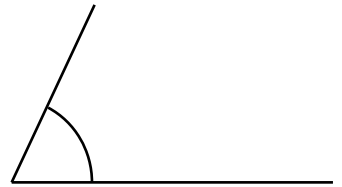
年 組 名前 ( )

分度器を使って角度をはかりましょう。

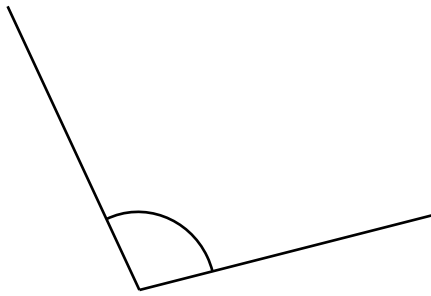
(1)



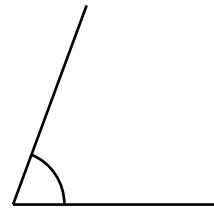
(2)




( )  
(3)



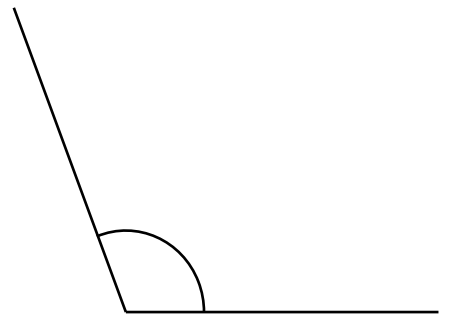
( )  
(4)



( )  
(5)



( )  
(6)



( ) ( )

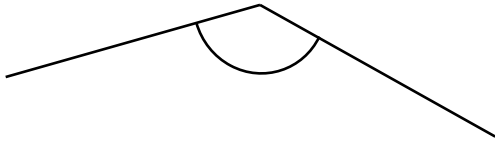
# 角の大きさの表し方8

(中級)

年 組 名前 ( )

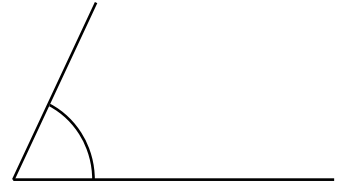
分度器を使って角度をはかりましょう。

(1)

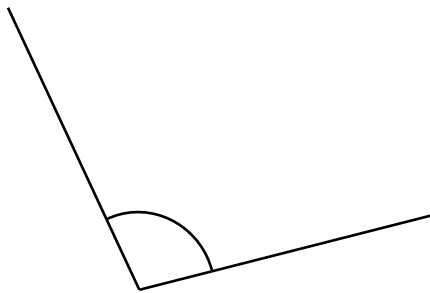


( **135°** )  
(3)

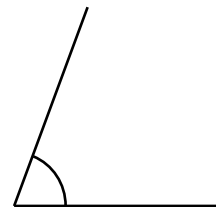
(2)




( **65°** )  
(4)



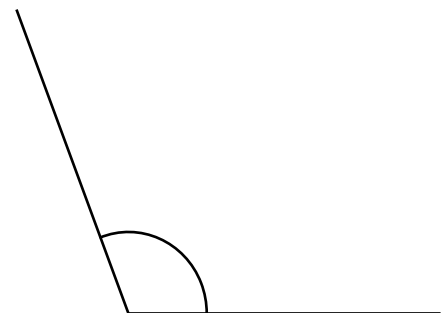
( **100°** )  
(5)



( **70°** )  
(6)



( **140°** )



( **110°** )